

Class 'C' General Knowledge Test - Practice Questions

Compiled from the General Knowledge Question Bank July 2014

Numbers in square brackets [] are the original Question Bank numbers

Give Way rules (general)

1. [4] - You are driving in a 60 km/h zone, with only one lane for traffic in your direction. You see a bus ahead (with this sign displayed on the rear) signalling its intention to pull out from a bus stop, you should -

- (a) Continue at your normal speed as the bus does not have priority.
 (b) Slow down, and give way to the bus as it has priority.
 (c) Sound your horn to stop the bus from pulling out.



2. [46] - There are no traffic signs or signals at an intersection. If you intend to drive through the intersection, you must give way to -

- (a) An oncoming vehicle about to turn right.
 (b) Vehicles on your left only.
 (c) Vehicles on your right.



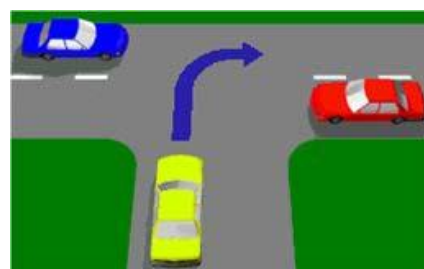
3. [47] - When making a right-hand turn at the intersection shown, you must give way to -

- (a) A vehicle approaching from your left and intending to turn right.
 (b) An oncoming vehicle going straight ahead or turning left, and any vehicle on your right.
 (c) Only pedestrians.



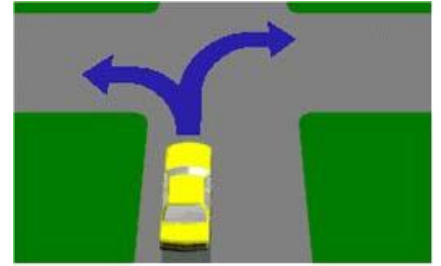
4. [48] - If turning right at a T-intersection (as shown) must you give way to vehicles approaching from both the left and right?

- (a) Yes, whether they are turning or not.
 (b) No, you have right of way.
 (c) No, only the vehicle on the right.



5. [50] - **If turning at an intersection are you required to give way to pedestrians?**

- (a) Yes, only if turning right.
- (b) Yes, only if turning left.
- (c) Yes, a driver turning right or left must give way to pedestrians, if there is a danger of a collision.



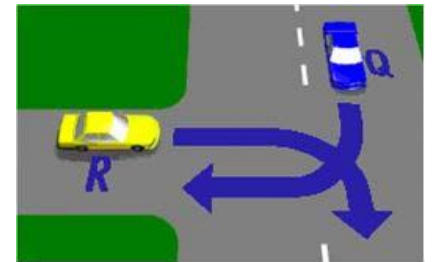
6. [53] - **In this diagram both vehicles O and P must pass through GIVE WAY signs before entering the intersection. Which vehicle goes first?**

- (a) Vehicle P goes first.
- (b) It depends on who moves first.
- (c) Vehicle O goes first.



7. [60] - **At the T-intersection shown in the diagram which vehicle should give way?**

- (a) Vehicle R.
- (b) Whichever vehicle got there last.
- (c) Vehicle Q.



8. [88] - **You are at an intersection and see a pedestrian crossing the road into which you are turning. You must -**

- (a) Swerve around the pedestrian to avoid hitting them.
- (b) Sound your horn to warn the pedestrian to get out of the way.
- (c) Give way to the pedestrian.

9. [143] - **When entering or leaving a driveway you must -**

- (a) Stop and give way only to vehicles.
- (b) Blow your horn to warn other road users.
- (c) Give way to bicycles, vehicles and pedestrians.

10. [165] - This person is standing on a pedestrian refuge. If he steps out onto your lane you should -

- (a) Slow down and sound the horn to warn the person to move back.
- (b) Give way to the person if there is any danger of colliding.
- (c) Maintain your speed so you do not hold up the traffic.



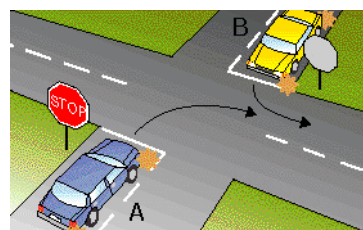
11. [178] - The diagram shows a priority sign for buses. Which of the following statements is correct?

- (a) Priority applies at all times.
- (b) Priority applies when the bus is travelling in a built-up area.
- (c) Priority does not apply when the speed limit is 40 Km/h.



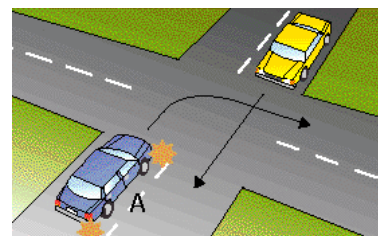
12. [307] - You drive up to an intersection with a stop sign in the car marked A and you wish to turn right. The car marked B facing you also has a stop sign and is indicating to turn left. Who can go first?

- (a) Whoever arrives at the intersection first.
- (b) Car A.
- (c) Car B.



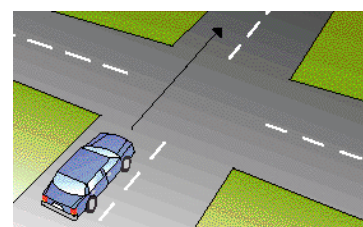
13. [308] - This intersection does not have any traffic lights or signs. You are in car A and want to turn right. When can you go?

- (a) Before the car going straight ahead has passed.
- (b) As soon as you get to the intersection.
- (c) After the car going straight ahead has passed.



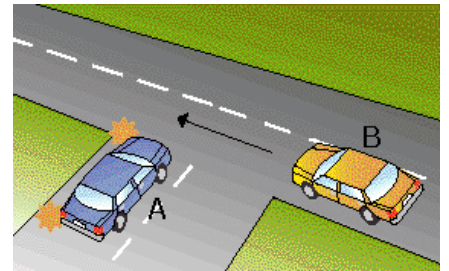
14. [309] - You come to an intersection that does not have traffic lights or signs. How do you decide when to drive straight ahead?

- (a) Slow down and give way to traffic going into the intersection on your right.
- (b) Wait until all traffic has left the intersection.
- (c) Whoever gets there first can go.



15. [310] - At this intersection there are no signs or traffic lights. You are in the car marked A. You want to turn left. What should you do?

- (a) Enter the intersection and make the turn.
- (b) Sound the horn to warn the other driver.
- (c) Slow down and give way to car B on your right.



16. [312] - You are in car A and are going straight ahead through the intersection. Who should give way?

- (a) Car B.
- (b) Whoever gets to the intersection first.
- (c) Car A.

