

**Class 'C' General Knowledge Test - Practice Questions**

Compiled from the General Knowledge Question Bank July 2014

Numbers in square brackets [ ] are the original Question Bank numbers

**Stop & Give Way signs & lines****1. [1] What is meant by this sign on or near a bridge?**

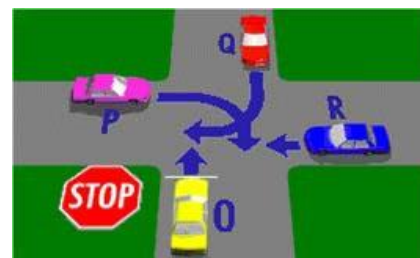
- (a) Stop at all times before crossing the bridge and only give way to pedestrians who may be crossing.
- (b) Do not overtake a vehicle travelling in the same direction.
- (c) Slow down and be prepared to give way to vehicles travelling in the opposite direction.

**2. [49] If a STOP or GIVE WAY sign has been knocked down, for example, as the result of an accident, does the line marked across the road have any meaning?**

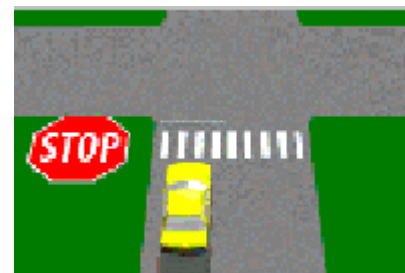
- (a) No, you only need to give way to the vehicle on your right.
- (b) Yes, it has the same meaning as the sign itself.
- (c) No, but you must give way if turning.

**3. [54] Vehicle O is at a STOP sign –**

- (a) Vehicle O must give way only to vehicle R.
- (b) All vehicles must give way to vehicle O.
- (c) Vehicle O must give way to vehicles P, Q and R.

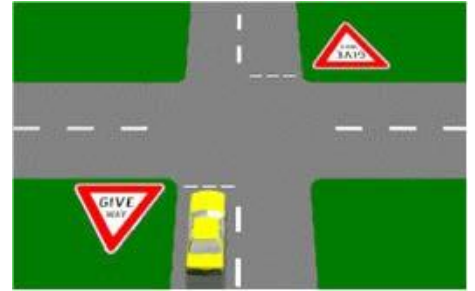
**4. [56] The diagram shows a marked pedestrian crossing at an intersection. There is also a STOP sign at the intersection. You have already stopped for a pedestrian. Must you stop again at the STOP line?**

- (a) Yes, at all times.
- (b) No, if the intersection is clear.
- (c) Yes, if there is traffic on your right only.



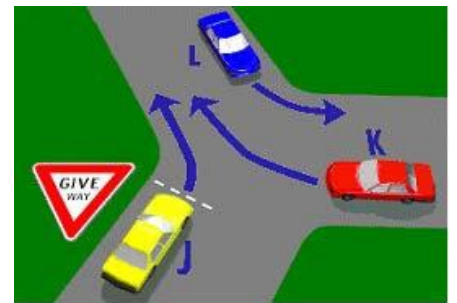
5. [57] A GIVE WAY sign at an intersection means that you must -

- (a) Stop completely at all times and have no right of way.
- (b) Be ready to stop and give way to all other traffic if there is danger of a collision.
- (c) Slow down and only give way to traffic on your right.



6. [58] Which vehicle in the diagram must give way?

- (a) Vehicle K.
- (b) Vehicle L.
- (c) Vehicle J.



7. [63] What should you do on approaching a railway level crossing displaying a STOP sign?

- (a) Stop, only if a train is at the crossing.
- (b) Slow down to 10 km/h, then proceed through the crossing.
- (c) Stop at all times and proceed when safe to do so.



8. [64] You are driving the car in the diagram. You must stop -

- (a) Only if there is a car on your right or left.
- (b) Only if there is danger of a collision with another vehicle.
- (c) Even when there is no other traffic.



9. [74] You drive up to an intersection with a stop sign. There is no painted stop line. Where should you stop?

- (a) Before coming to and as near to the intersection as possible.
- (b) At the point where you can see clearly in both directions.
- (c) At least five metres before the intersection.



**10. [213] What does this sign mean?**

- (a) If traffic lights are out of order or the amber light is flashing, you must stop and give way to traffic as if you are at an intersection with stop signs.
- (b) Stop, red light camera in operation.
- (c) Stop at all times and give way to all traffic.

**11. [223] When you see this sign you must -**

- (a) Slow down and be prepared to stop only if there is any danger of a collision with another vehicle or pedestrian.
- (b) Stop at the stop line and give way to all traffic.
- (c) Stop at the stop line and give way to all traffic on your right only.

**12. [224] When you see this sign you must -**

- (a) Slow down and be prepared to give way to traffic on your right only.
- (b) Slow down and be prepared to stop and give way to all traffic.
- (c) Stop and give way to all traffic even if the intersection is clear.

